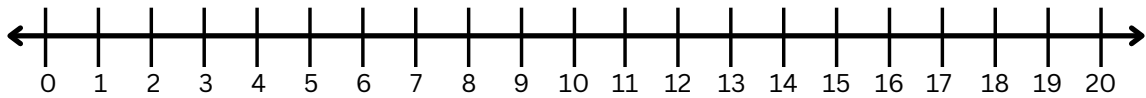


Name: _____

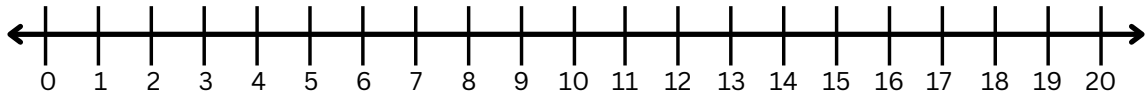
Date: _____

Addition

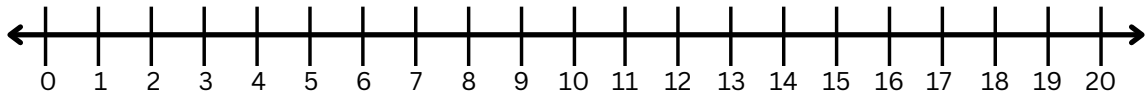
Sum the equation by drawing hops on the number line



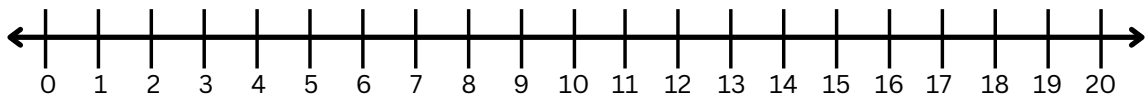
$$5 + 3 + 8 = \underline{\hspace{2cm}}$$



$$2 + 4 + 9 = \underline{\hspace{2cm}}$$



$$3 + 4 + 6 = \underline{\hspace{2cm}}$$



$$4 + 9 + 5 = \underline{\hspace{2cm}}$$