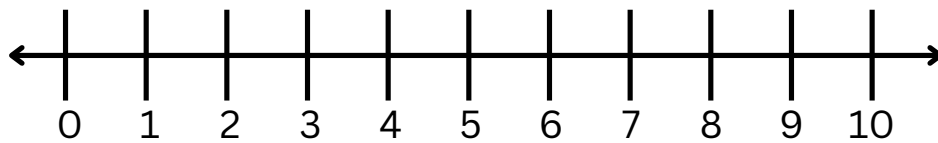


Name: _____

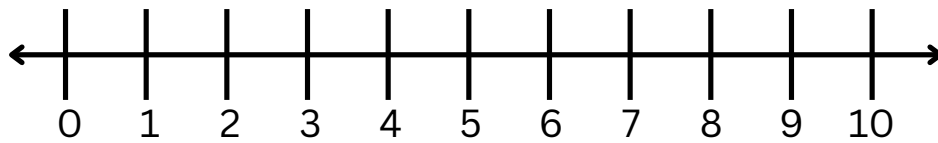
Date: _____

Addition

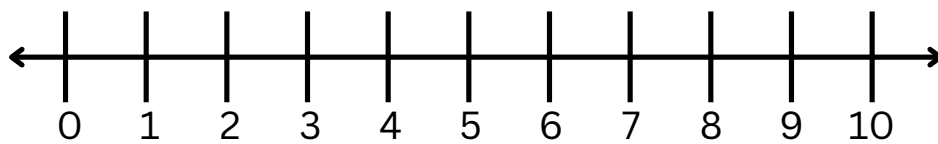
Sum the equation by drawing hops on the number line



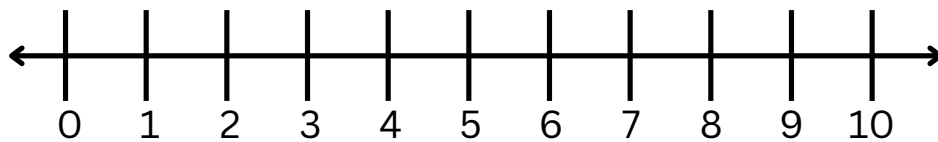
$$2 + 1 + 6 = \underline{\hspace{2cm}}$$



$$4 + 1 + 2 = \underline{\hspace{2cm}}$$



$$2 + 4 + 1 = \underline{\hspace{2cm}}$$



$$5 + 1 + 2 = \underline{\hspace{2cm}}$$