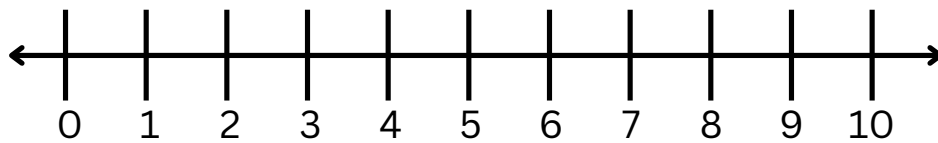


Name: _____

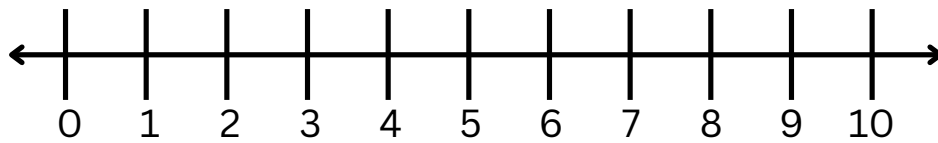
Date: _____

Addition

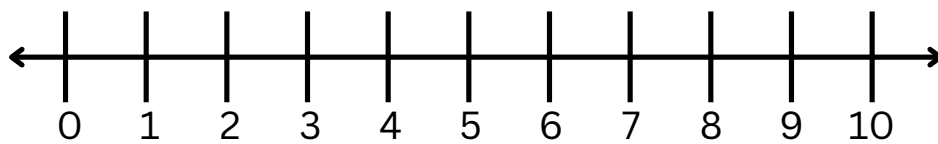
Sum the equation by drawing hops on the number line



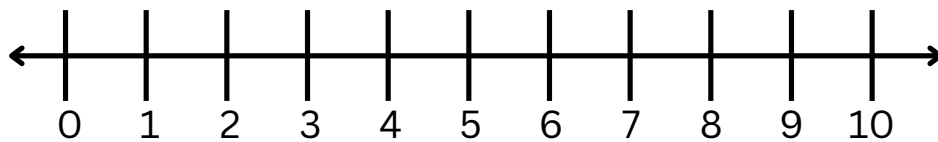
$$2 + 1 + 3 = \underline{\quad}$$



$$4 + 4 + 2 = \underline{\quad}$$



$$1 + 7 + 1 = \underline{\quad}$$



$$1 + 3 + 2 = \underline{\quad}$$