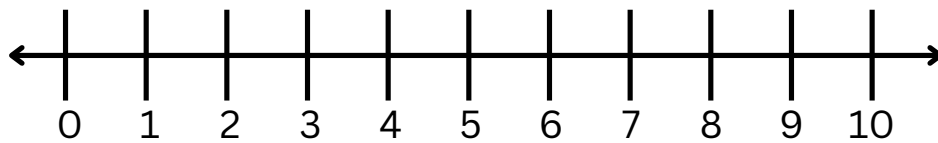


Name: _____

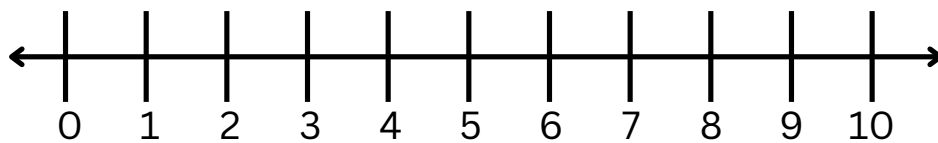
Date: _____

Addition

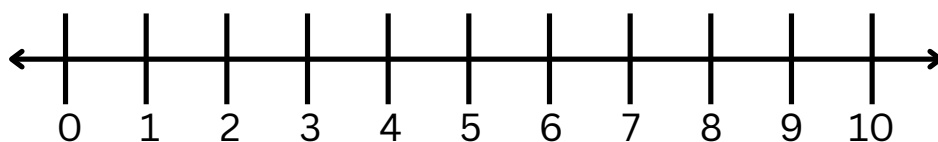
Sum the equation by drawing hops on the number line



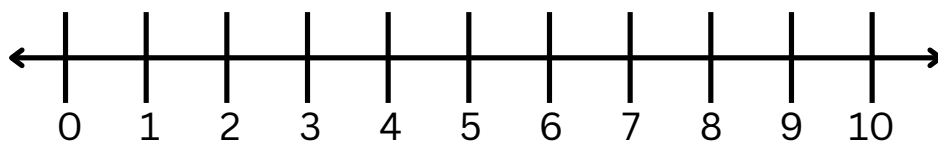
$$3 + 1 + 4 = \underline{\quad}$$



$$1 + 2 + 4 = \underline{\quad}$$



$$3 + 2 + 2 = \underline{\quad}$$



$$5 + 2 + 1 = \underline{\quad}$$