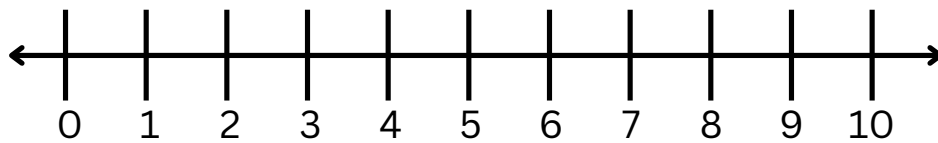


Name: _____

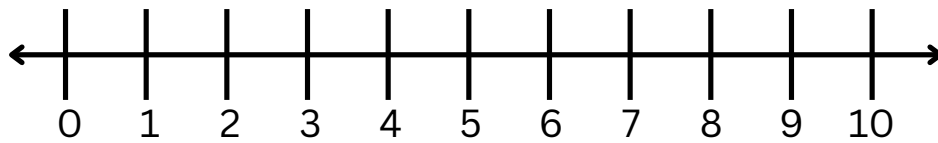
Date: _____

Addition

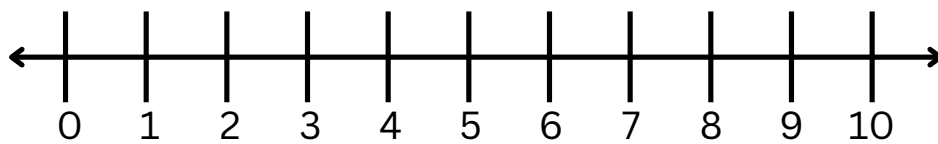
Sum the equation by drawing hops on the number line



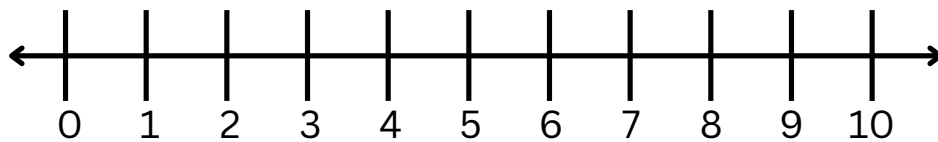
$$2 + 8 = \underline{\quad}$$



$$6 + 1 = \underline{\quad}$$



$$4 + 3 = \underline{\quad}$$



$$4 + 4 = \underline{\quad}$$