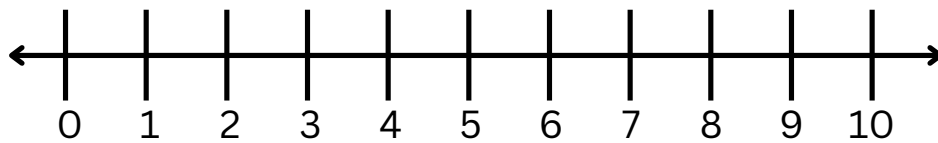


Name: _____

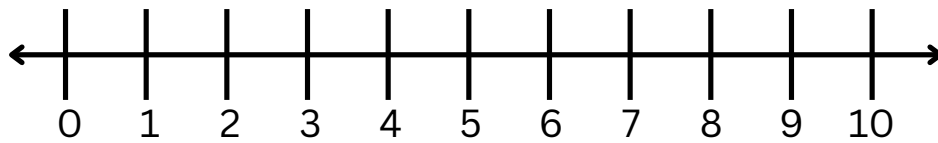
Date: _____

Addition

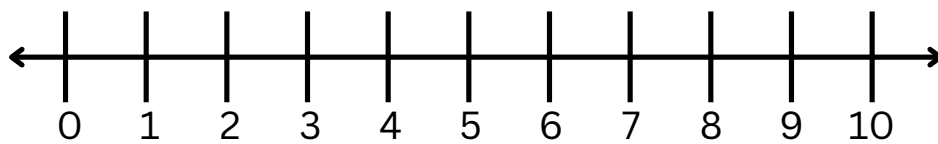
Sum the equation by drawing hops on the number line



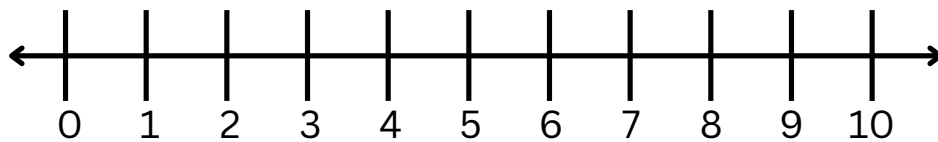
$$1 + 8 = \underline{\quad}$$



$$7 + 3 = \underline{\quad}$$



$$3 + 6 = \underline{\quad}$$



$$2 + 8 = \underline{\quad}$$