

Name: _____

Date: _____

Draw the counters for each frame

9 counters

3 counters

2 counters

4 counters

6 counters

7 counters

3 counters

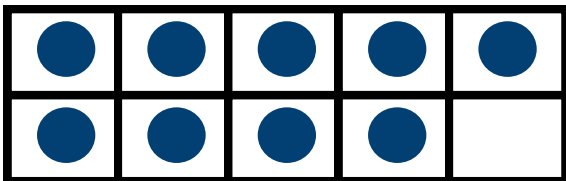
8 counters

Name: _____

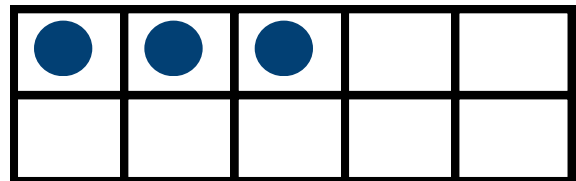
Date: _____

Draw the counters for each frame

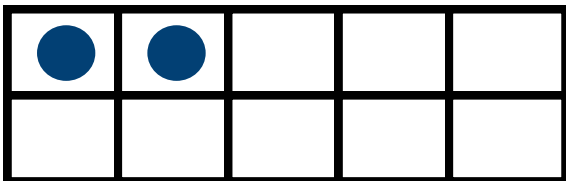
9 counters



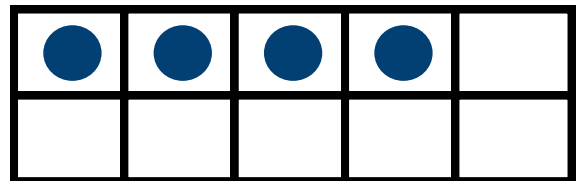
3 counters



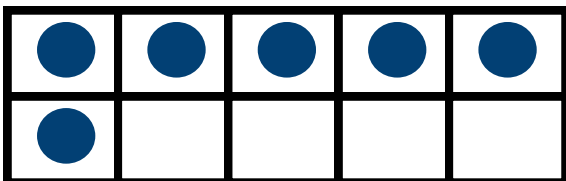
2 counters



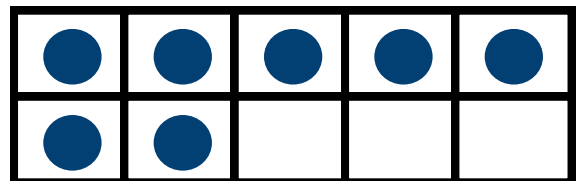
4 counters



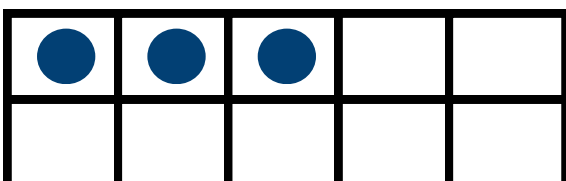
6 counters



7 counters



3 counters



8 counters

