

Name: _____

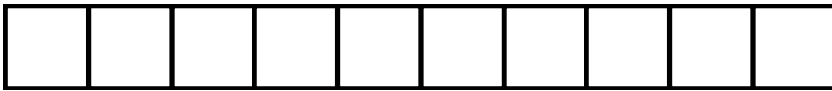
Date _____

Measurement Worksheet

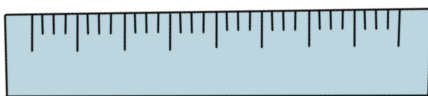
See the objects and write how many blocks long it is



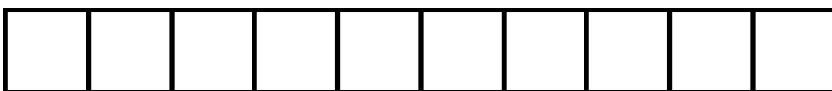
blocks



blocks



blocks



blocks