

Name: _____

Date: _____

Draw the counters for each frame

3 counters

7 counters

10 counters

8 counters

6 counters

4 counters

1 counters

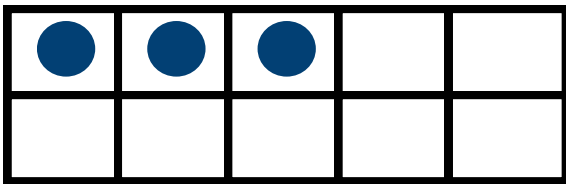
3 counters

Name: _____

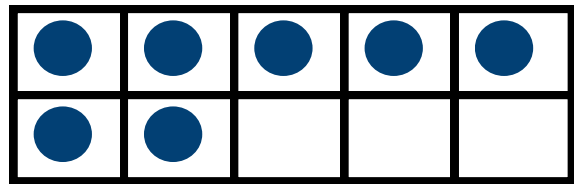
Date: _____

Draw the counters for each frame

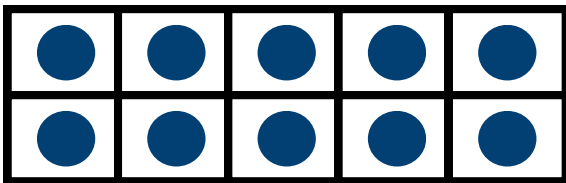
3 counters



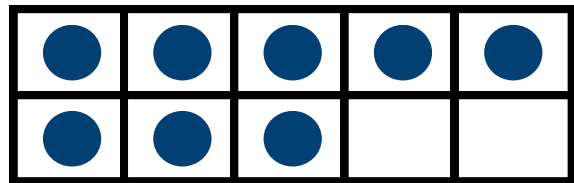
7 counters



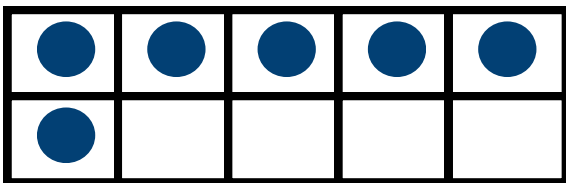
10 counters



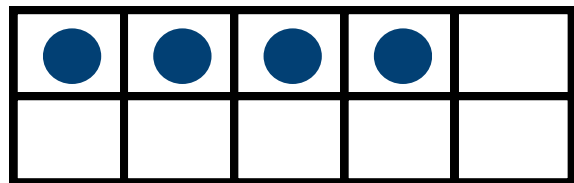
8 counters



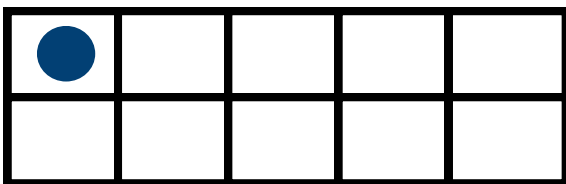
6 counters



4 counters



1 counters



3 counters

