


Name: _____


Date: _____

Addition

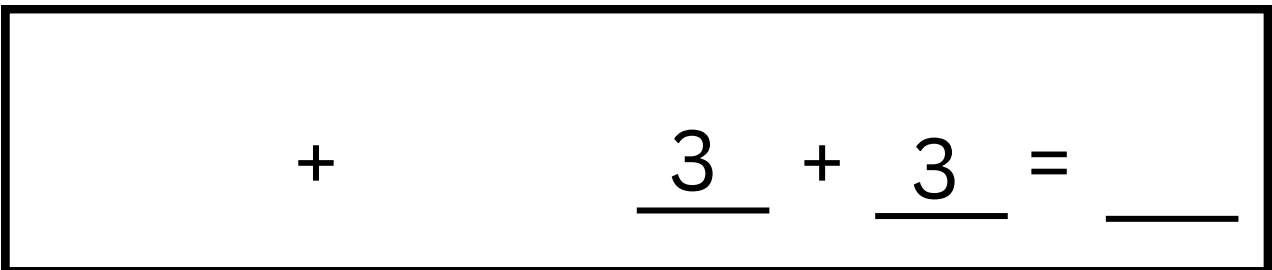
Count/draw hearts, read/write numbers, find the sum




A rectangular box containing an addition problem. On the left, there are 5 red hearts arranged in two rows: the top row has 3 hearts and the bottom row has 2 hearts. This is followed by a plus sign. On the right, there are 4 red hearts arranged in two rows: the top row has 2 hearts and the bottom row has 2 hearts. This is followed by a plus sign, then a blank line, another plus sign, another blank line, an equals sign, and a final blank line.



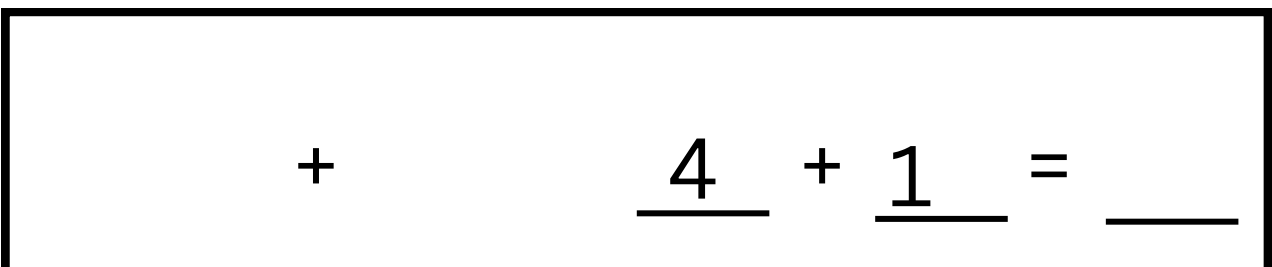
A rectangular box containing an addition problem. On the left, there are 6 pink hearts arranged in two columns of 3. This is followed by a plus sign. On the right, there are 4 pink hearts arranged in two columns of 2. This is followed by a plus sign, then a blank line, another plus sign, another blank line, an equals sign, and a final blank line.



A rectangular box containing an addition problem. On the left is a plus sign. On the right is the number 3 above a blank line, followed by a plus sign, the number 3 above a blank line, an equals sign, and a final blank line.



A rectangular box containing an addition problem. On the left, there are 3 green hearts arranged in a diagonal line from top-left to bottom-right. This is followed by a plus sign. On the right, there are 2 green hearts: one at the top and one below it. This is followed by a plus sign, then a blank line, another plus sign, another blank line, an equals sign, and a final blank line.





A rectangular box containing an addition problem. On the left is a plus sign. On the right is the number 4 above a blank line, followed by a plus sign, the number 1 above a blank line, an equals sign, and a final blank line.



Name: _____

Date: _____



Addition

Count/draw hearts, read/write numbers, find the sum

	+		_____	+	_____	=	_____
---	---	---	-------	---	-------	---	-------

	+		_____	+	_____	=	_____
--	---	--	-------	---	-------	---	-------

_____	+	_____	2	+	4	=	_____
-------	---	-------	---	---	---	---	-------

	+		_____	+	_____	=	_____
---	---	---	-------	---	-------	---	-------

_____	+	_____	1	+	3	=	_____
-------	---	-------	---	---	---	---	-------